




# EDUCATION DAY BOOKLET

THIS BOOKLET BELONGS TO

---



# ALPHABETICAL ORDER

WRITE THE IMAGES IN THE CORRECT ORDER

**NET**



**SHOE**

**BALL**



**STAR**

**WATER**



## WORD ORDER

**1**

**2**

**3**


**4**

**5**

# COLLI'S MAZE

Grade Level	Grade Level
K	02

HELP COLLI REACH THE END OF THE MAZE



# WRITING

LEARN YOUR LETTERS OR PRACTICE CURSIVE

COLLEGE PARK

COLLEGE PARK

SKYHAWKS

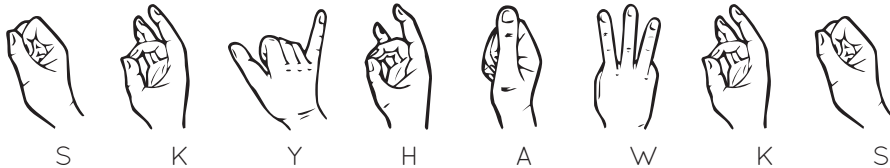
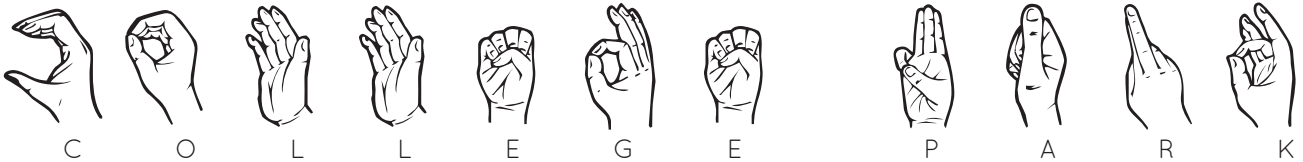
SKYHAWKS

College Park Skyhawks

College Park Skyhawks

0 1 2 3 4 5 6 7 8 9







0 1 2 3 4 5 6 7 8 9



# COUNT 'EM UP

Grade Level	Grade Level
K	02


**COUNT EACH SET OF BASKETBALLS AND  
WRITE THE CORRECT NUMBER**



Grade Level    Grade Level  
K - 02

# COLOR COLLI

BRIGHTEN UP COLLI'S DAY



# ALL TIED UP

Grade Level 03 - 05

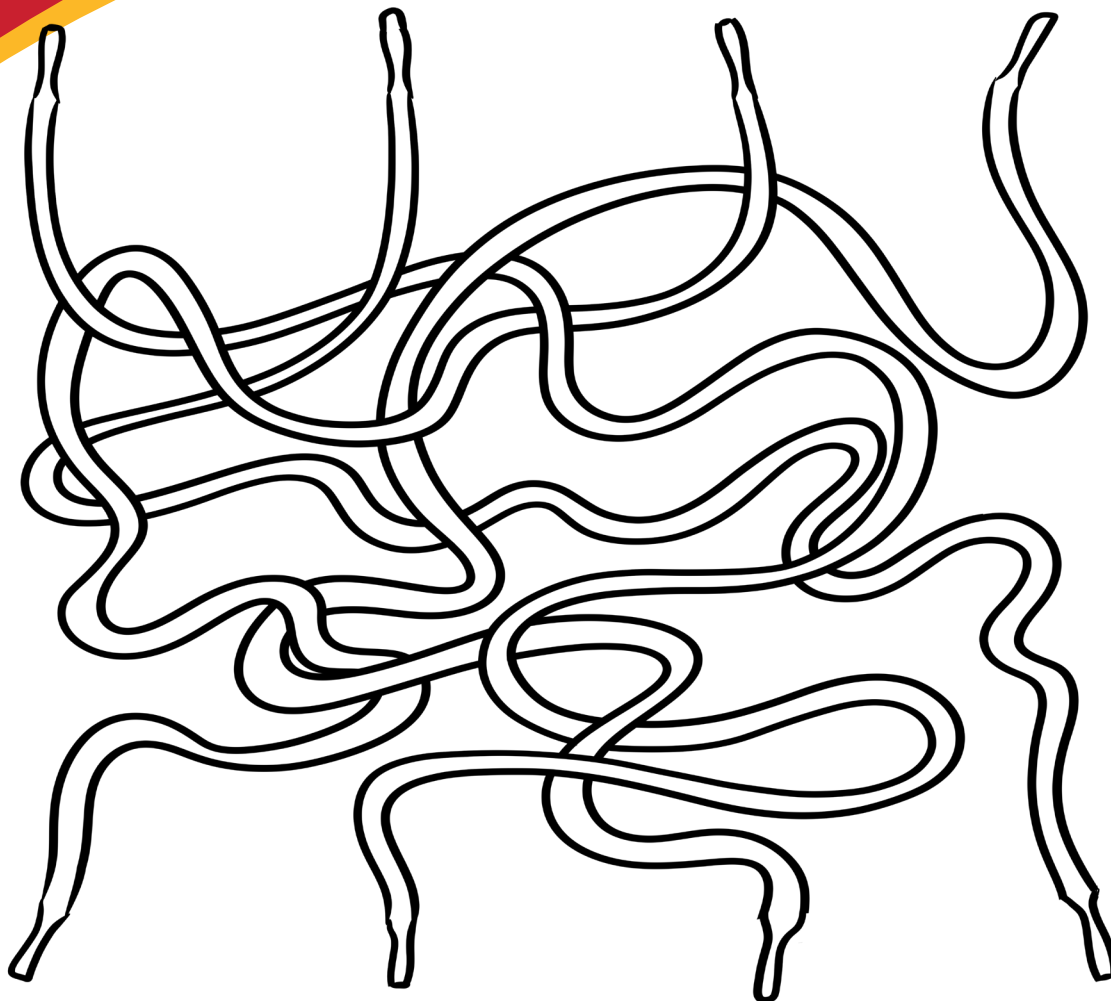
FOLLOW THE SHOE LACES TO FIGURE OUT THE JERSEY NUMBER OF EACH PLAYER

**MALIK  
ELLISON**

**CHRIS  
SILVA**

**CAT  
BARBER**

**LANGSTON  
GALLOWAY**



# SCRAMBLED UP

FIGURE OUT THE WORDS THAT COLLI  
SCRAMBLED UP

RLBIEBD

--	--	--	--	--	--	--	--

TUROC

--	--	--	--	--

KDUN

--	--	--	--

ILOCL

--	--	--	--	--

MTAE

--	--	--	--

ETN

--	--	--



# MAP IT OUT

Grade Level 03 - 05

WHERE ARE THESE G-LEAGUE TEAMS LOCATED?



Austin Spurs =



Maine Celtics =



South Bay Lakers =



College Park Skyhawks =



Memphis Hustle =



Stockton Kings =



Greensboro Swarm =



Rio Grande Vipers =



Windy City Bulls =



Lakeland Magic =




G League Ignite =



Wisconsin Herd =

# MULTIPLICATION

**HELP COLLI CALCULATE THE TOTALS**

	<b>GEAR</b>	<b>PRICE</b>
	<b>JERSEY</b>	<b>\$44</b>
	<b>SHORTS</b>	<b>\$30</b>
	<b>BASKETBALL</b>	<b>\$12</b>
	<b>SOCKS</b>	<b>\$10</b>
	<b>SWEATBAND</b>	<b>\$6</b>

USE THE CHART ABOVE TO ANSWER THE FOLLOWING QUESTIONS:

1. IF COLLI BUYS 9 BASKETBALLS WHAT IS HIS TOTAL?
2. IF COLLI BUYS 3 PAIRS OF SHORTS AND 4 JERSEYS WHAT IS HIS TOTAL?
3. IF COLLI BUYS 5 SWEATBANDS WHAT IS HIS TOTAL?
4. IF COLLI BUYS 2 JERSEYS, 4 SWEATBANDS, AND 3 BASKETBALLS WHAT IS HIS TOTAL?
5. IF COLLI BUYS 8 PAIRS OF SOCKS AND 4 PAIRS OF SHORTS WHAT IS HIS TOTAL?

# MEET THE TEAM

Grade Level	Grade Level
06	08

DO YOU KNOW ALL OF OUR PLAYERS?



**GIORGI  
BEZHANISHVILI**  
#13



**ARMONI  
BROOKS**  
#12



**DONOVAN  
WILLIAMS**  
#4



**MALIK  
ELLISON**  
#0



**TYSON  
ETIENNE**  
#11



**TRENT  
FOREST**  
#2



**TYRESE  
MARTIN**  
#22



**LANGSTON  
GALLOWAY**  
#9



**CHRIS  
SILVA**  
#30



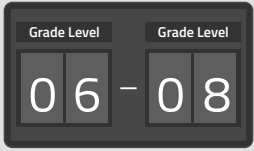
**DAVION  
WARREN**  
#3



**BRANDON  
WILLIAMS**  
#5



**CAT  
BARBER**  
#1



# IN THE ZONE

## LEARN ABOUT TODAY'S GAME

PLAYER NAME	#	POSITION	HEIGHT	WEIGHT	COLLEGE

- 1. WHAT TIME DOES THE GAME START?
- 2. WHO IS THE OPPOSING TEAM'S NBA AFFILIATE?
- 3. WHAT IS THE OPPOSING TEAM'S MASCOT?
- 4. WHERE IS THE OPPOSING TEAM FROM?
- 5. WHAT IS THE SCORE AT HALFTIME?
- 6. WHAT IS THE FINAL SCORE?
- 7. WHICH SKYHAWKS PLAYER SCORED THE MOST?
- 8. WHICH SKYHAWKS PLAYER HAD THE MOST REBOUNDS? MOST ASSISTS?

# WORD SEARCH

Grade Level	Grade Level
06	08

## FIND COLLI'S FAVORITE BASKETBALL WORDS

ATLANTA	DUNK	G LEAGUE	NBA	SWISH
BACKBOARD	FOUL	GUARD	NET	TIMEOUT
BASKETBALL	FOUL LINE	HOOPS	PARK	TIPOFF
CENTER	GATEWAY	JUMP	REBOUND	TRAVEL
COLLEGE	GEORGIA	LAYUP	SKYHAWKS	TURNOVER

B	A	C	K	B	O	A	R	D	R	T	L	U	O	F
C	F	A	L	P	A	G	O	S	E	U	X	S	S	M
B	L	O	U	E	E	C	K	W	V	O	K	N	D	F
V	A	Y	E	O	V	W	L	I	O	E	M	N	N	J
G	A	S	R	N	A	A	I	S	N	M	M	V	U	Z
L	U	G	K	H	I	A	R	H	R	I	T	L	N	D
I	I	A	Y	E	M	L	T	T	U	T	X	Y	G	J
A	D	K	R	P	T	D	L	L	T	Y	M	C	L	H
N	S	E	E	D	H	B	F	U	A	N	E	V	E	F
E	G	E	L	L	O	C	A	W	O	N	E	N	A	M
R	E	B	O	U	N	D	E	L	T	F	T	T	G	F
F	F	O	P	I	T	T	K	E	L	J	S	A	U	Y
W	U	A	Y	I	A	N	R	N	U	Z	R	Y	E	V
P	T	R	P	G	T	B	A	M	H	O	O	P	S	F
Y	F	U	J	K	L	A	P	J	I	Y	R	B	F	G

# EMOJI MATH

DECIPHER THE EMOJIS TO SOLVE THE PROBLEM

**HINT**  
TURN THE EMOJIS INTO VARIABLES

$$\text{🏀} + \text{🏀} = 10$$

$$\text{🏀} \times \text{🗣️} + \text{🗣️} = 12$$


$$\text{🏀} \times \text{🗣️} - \text{⭐} \times \text{🏀} = \text{🏀}$$

$$\text{⭐} = \underline{\hspace{2cm}}$$

# CROSSWORD

Grade Level 09 - 12

## DO YOU KNOW BASKETBALL LIKE A PRO?



### ACROSS

1. A shot that misses the backboard, rim, and net entirely
3. The act of passing the ball to a teammate who scores
4. When a player holding the ball moves one or both their feet illegally
7. If the score is tied at the end of regulation play, the game will enter into this period
8. The act of bouncing the ball continuously
9. A breach of the rules more serious than a violation
10. Strategies used to prevent the opposing team from scoring baskets
12. The intermission between the 2nd and 3rd quarters of the game
14. A deceptive motion to throw the defender off balance
16. When a player guards tightly or hits an opponent

### DOWN

2. The College Park Skyhawks play this sport
5. The rectangular piece of wood or fiberglass the rim attaches to
6. College Park Skyhawks mascot name
9. An unhindered shot made from behind a set line that is awarded from a foul
11. When a player deflects the ball to prevent a score
13. A method of scoring where the player puts the ball directly in the basket using one or both hands
15. A player in their first full season of a sport is called



# SKYHAWKS YOUTH BASKETBALL

## JOIN US THIS MARCH AT COLLI HOOPS!

Led by College Park Skyhawks youth basketball coaches, our camp will focus on fundamentals, enhancing skills and promoting teamwork. Open to children in grades 1st - 8th.

**SIGN UP TO BE NOTIFIED WHEN DATES ARE ANNOUNCED:**

[CPSKYHAWKS.COM/YOUTHBASKETBALL](http://CPSKYHAWKS.COM/YOUTHBASKETBALL)





**DON'T MISS A WELL CHECK!**

## **Stay Ahead of the Game!**

CareSource wants you to stay as healthy as possible.  
The ball's in your court. Schedule a preventive care visit with your  
primary care physician today.



**CareSource<sup>®</sup>**

GP



ST. MARY'S COLLEGE OF ST. MARY'S

COLOR AND SHOW YOUR SIGN

# ANSWERS

**MALIK ELLISON**



**CHRIS SILVA**



**CAT BARBER**



**LANGSTON GALLOWAY**



1.  $9 \times 12 = \$108$

2.  $(30 \times 3) + (4 \times 44) = \$266$

3.  $5 \times 6 = \$30$

4.  $(2 \times 44) + (4 \times 6) + (3 \times 12) = \$148$

5.  $(8 \times 10) + (4 \times 30) = \$200$

## WORD ORDER

**1** BALL

**2** NET

**3** SHOE

**4** STAR

**5** WATER

RLBIEBD **D R I B B L E**

TUROC **C O U R T**

KDUN **D U N K**

ILOCL **C O L L I**

MTAE **T E A M**

ETN **N E T**

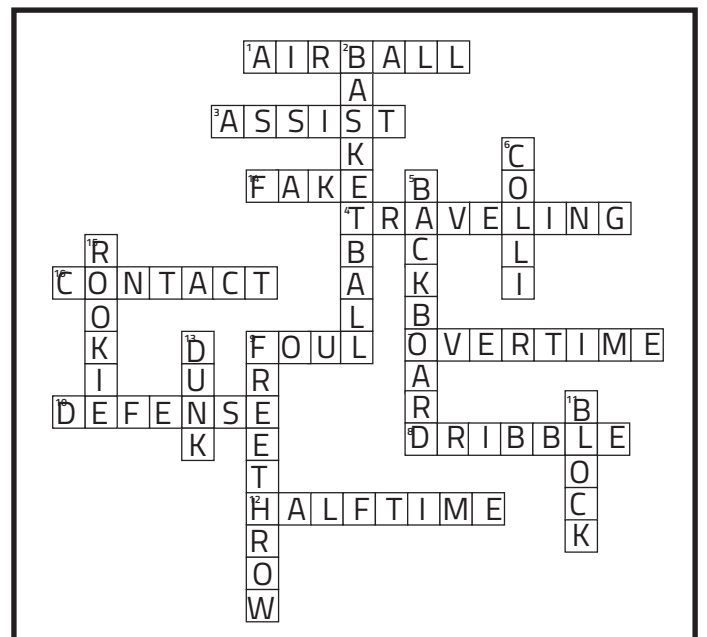
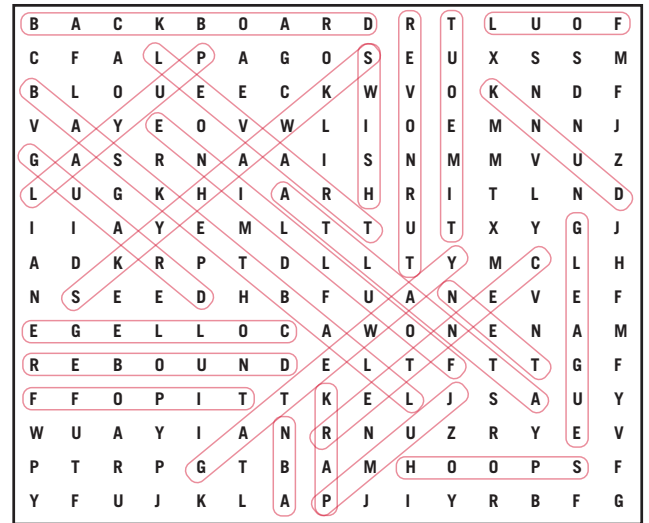
$x + x = 10$       $5 + y + y = 12$       $5 \times 2 - n \times 5 = 5$

$2x = 10$       $6y = 12$       $10 - 5n = 5$

$x = 5$       $y = 2$       $-5n = 5 - 10$

$-5n = -5$

$n = 1$



Austin Spurs = **4**     Maine Red Claws = **11**     South Bay Lakers = **3**

CP Skyhawks = **7**     Memphis Hustle = **1**     Stockton Kings = **2**

Greensboro Swarm = **12**     Rio Grande Vipers = **5**     Windy City Bulls = **10**

Lakeland Magic = **9**     G League Ignite = **8**     Wisconsin Herd = **6**



# LET'S FLY

@CPSKYHAWKS | #TRUETOOTHESOUTHSIDE



$$2 \times 2 = 4$$

$$E = mc^2$$